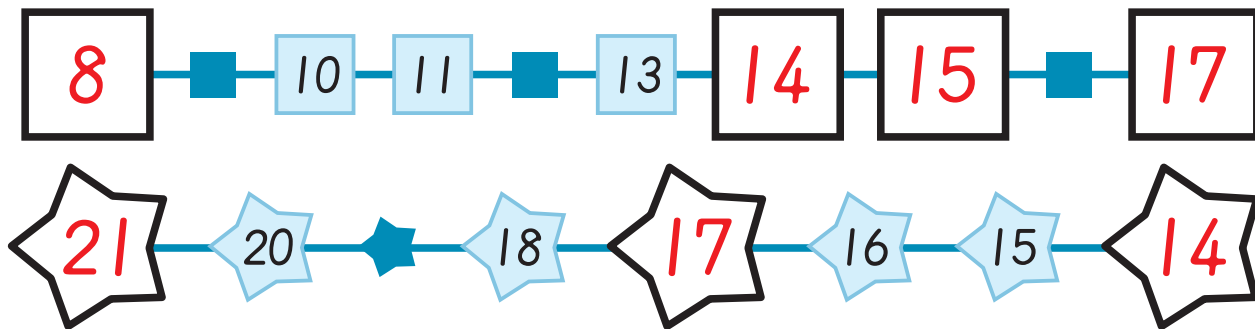


(老師專用)

X1 得分

1



X2 得分

2

例題


4

7

3

X3 得分

3



1

1	7	5	2	3

2

例題

	>	
	=	
	<	


	>	
	=	
	<	

	>	
	=	
	<	

X4 得分

4

→ 1, 2, 3, ...



..., 3, 2, 1 ←

例題

	→	←
	(3)	(6)

	→	←
	(7)	(2)

		→	←
		5	(4)

			→	←
			(2)	7



X5 得分

5

例題



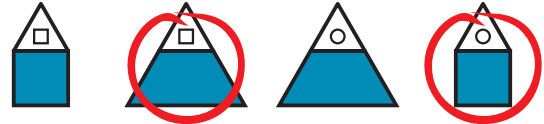


X6 得分

6

例題





X7 得分

7

例題

X8 得分

8

例題

後面還有題目

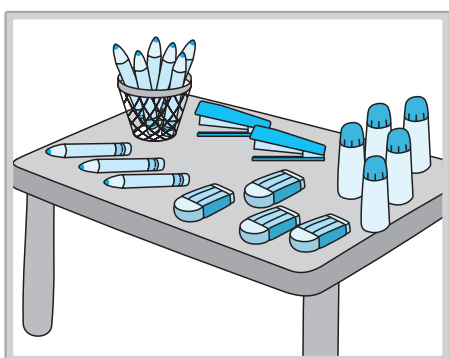
X9 得分

9

例題

X10 得分

10



	✓	✓								(2)	4
	✓	✓	✓	✓	✓	✓	✓	✓	✓	(9)	1
	✓	✓	✓	✓	✓					(5)	2
	✓	✓	✓	✓						(4)	3



X11 得分

11

例題

X12 得分

12



X13 得分

13

$8 + 3 = (11)$

$5 + (8) = 13$

$(5) + 6 = 11$

$15 - 6 = (9)$

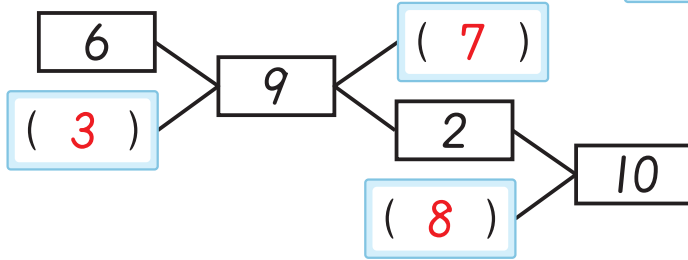
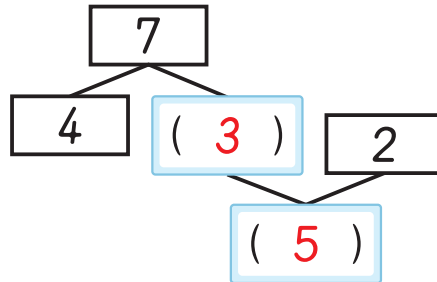
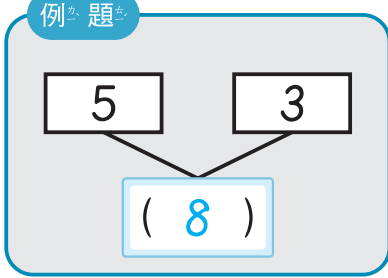
$12 - (4) = 8$

$(13) - 4 = 9$

X14 得分

14

例題



X15 得分

15




請依左圖回答問題：

- 小欣左手牽著 (戊)。
- 小美右手牽著 (丁)。

X16 得分

16

→ 1, 2, 3, ……



……, 3, 2, 1 ←

$$\begin{array}{|c|} \hline 3 \\ \hline (2) \\ \hline \end{array}$$

$$\begin{array}{|c|} \hline 4 \\ \hline (1) \\ \hline \end{array} + \begin{array}{|c|} \hline 4 \\ \hline (2) \\ \hline \end{array} = (3)$$

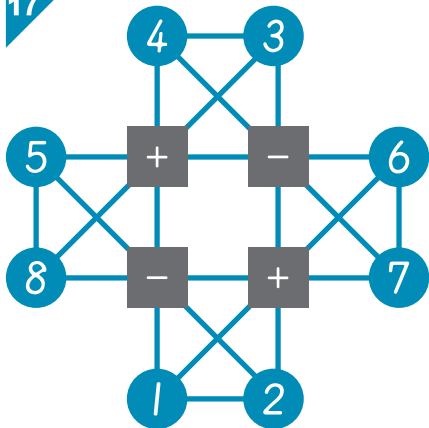
$$\begin{array}{|c|} \hline 2 \\ \hline (4) \\ \hline \end{array}$$

$$\begin{array}{|c|} \hline 2 \\ \hline (5) \\ \hline \end{array} - \begin{array}{|c|} \hline 6 \\ \hline (3) \\ \hline \end{array} = (2)$$



X17 得分

17



例題

8 \rightarrow \swarrow $8 \begin{matrix} +, - \\ - \end{matrix} (2) = (6)$

2 \uparrow \rightarrow $2 \begin{matrix} +, - \\ + \end{matrix} (7) = (9)$

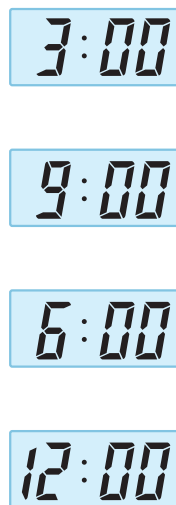
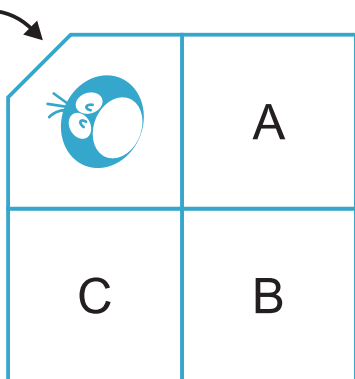

1 \nearrow \rightarrow \swarrow \uparrow $1 \begin{matrix} +, - \\ + \end{matrix} (7) \begin{matrix} +, - \\ - \end{matrix} (3) = (5)$

5 \swarrow \downarrow \nearrow \nearrow $5 \begin{matrix} +, - \\ - \end{matrix} (1) \begin{matrix} +, - \\ + \end{matrix} (6) = (10)$

X18 得分

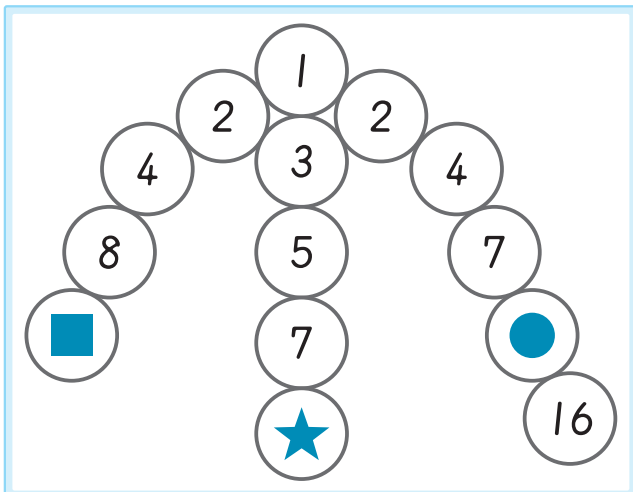
18

連カ連カ看マ:



X19 得分

19



1 ■ = (16)

★ = (9)

2 ● + ★ = ■ + (4)



數字關係

Y1 得分

例題

(8) (10) (12)
 () () (✓)

(11) (13) (15)
 () () (✓)

(6) (7) (8) (9)
 () (✓) () ()

圖形疊合

例題

() () (✓) ()

Y2 得分

() (✓) () ()

() () (✓) ()

() (✓) () ()

() () () (✓)

立體視圖



Y3 得分

例題







圖形規律



例題

I, L, Δ, I, L, Δ, I, L, Δ, I, , Δ, I, L,
 (I, , J, Δ)

Y4 得分


<, >, ^, <, >, ^, <, >, ^, <, >, ^, <, , ^,
 (<, ^, v, )


/, ^, Δ, Δ, /, ^, Δ, Δ, /, ^, Δ, Δ, /, , Δ, Δ, /, ^,
 (, Δ, Δ, /)


⊃, U, C, n, ⊃, U, C, n, ⊃, , C, n, ⊃, U, C, n, ⊃,
 (n, C, , ⊃)


數字規律 請觀察數字規律，找出  的數字。

Y5 得分

1 → 2 → 2 → 3 → 3 → 3 → 4 → 4 → 4 → 4 →  → 5 → 5
 (5)

2 → 2 → 3 → 4 → 2 → 2 → 3 → 4 → 2 →  → 3 → 4 → 2
 (2)


1 → 2 → 4 → 5 → 7 → 8 →  → 11 → 13 → 14
 (10)

0 → 3 → 2 → 5 → 4 → 7 → 6 → 9 → 8 →  → 10
 (11)




視圖判斷

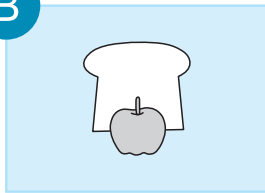
Y6 得分



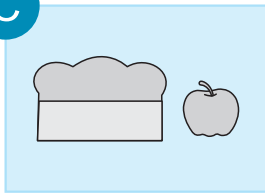
A



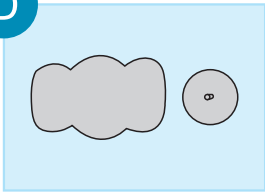
B




C



D



E



(D)



(C)



(E)



(B)

後面還有題目



(老師專用)

Z1 得分

1



左圖中，
可以找到 (10) 個三角形。

Z2 得分

2

我最多有 6 枝



我最少有 3 枝



我們的糖果數量都不一樣喔！




的 比 多，但比 少。請問：

有 (5) 枝， 有 (4) 枝。

Z3 得分

3











聖誕樹上依一定規律裝飾 6 串珠子，請問：

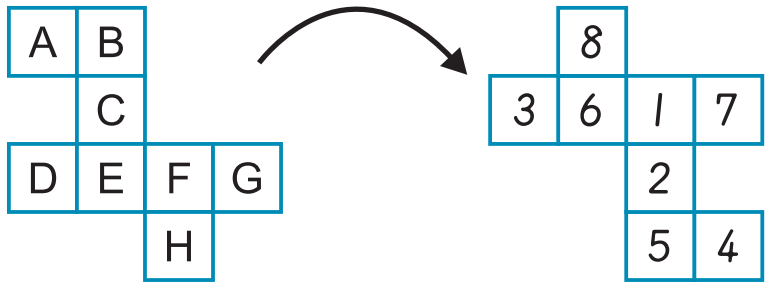
- ① 第 4 串有 (5) 顆 。
- ② 第 6 串有 (6) 顆 。






Z4 得分

4

-  → A
-  → B
-  → C
-  → D
-  → E
-  → F
-  → G
-  → H






 (8)
  (6)
  (1)
  (5)




 +  +  = (9)




 -  +  = (3)




Z5 得分

5

 +  +  = 7 公 $\frac{2}{5}$ 斤 $\frac{1}{5}$

 +  +  = 4 公 $\frac{2}{5}$ 斤 $\frac{1}{5}$

 =  + 

		
(3)	(1)	(2)
公 $\frac{2}{5}$ 斤 $\frac{1}{5}$	公 $\frac{2}{5}$ 斤 $\frac{1}{5}$	公 $\frac{2}{5}$ 斤 $\frac{1}{5}$