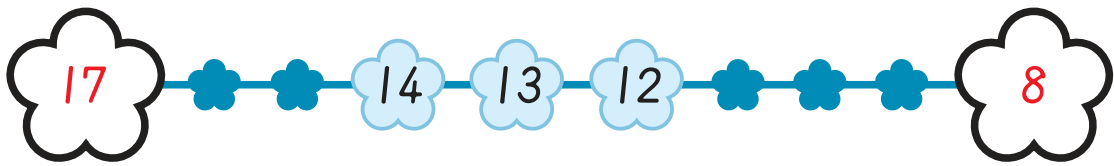
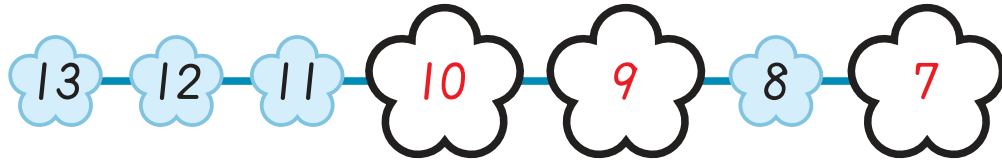
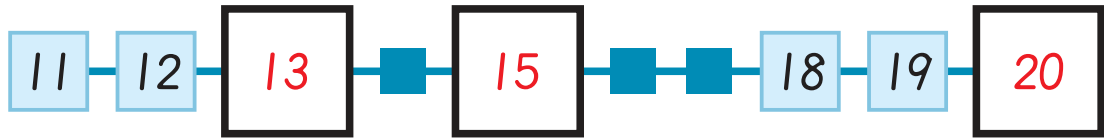
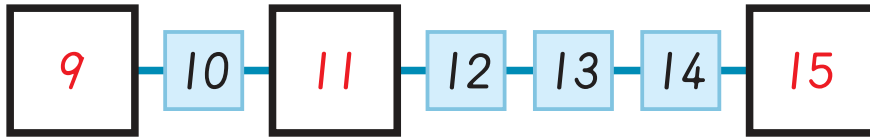


(老師專用)


X1 得分

1

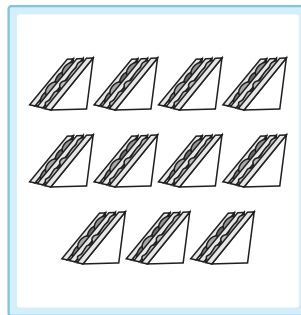


X2 得分


2



8



11



16

X3 得分

3

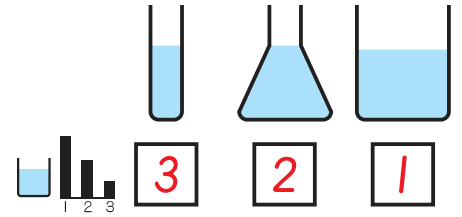
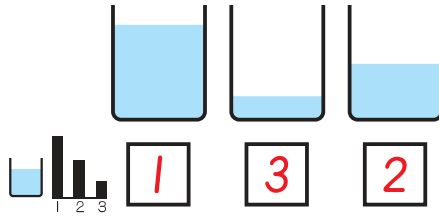
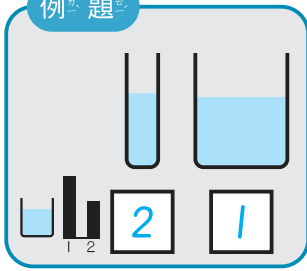
例題



X4 得分

4




例題



X5 得分

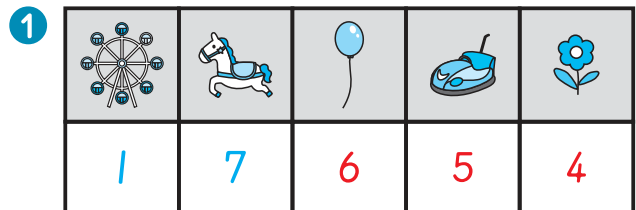

5

例題



X6 得分

6



2 比 比 (多 カエテ, 少 アズ) (6)

3 比 (多 カエテ, 少 アズ) (1)

4 比 (多 カエテ, 少 アズ) (3)

後面還有題目

X7 得分

7

$4 + 5 = (9)$

$6 + (5) = 11$

$(9) + 4 = 13$

$18 - 3 = (15)$

$15 - (8) = 7$

$(20) - 8 = 12$

X8 得分

8

★ = 10 ☆ = 1

例題

X9 得分

9

例題

X10 得分

10

連カ連カ看マ、：

○	2
○	3

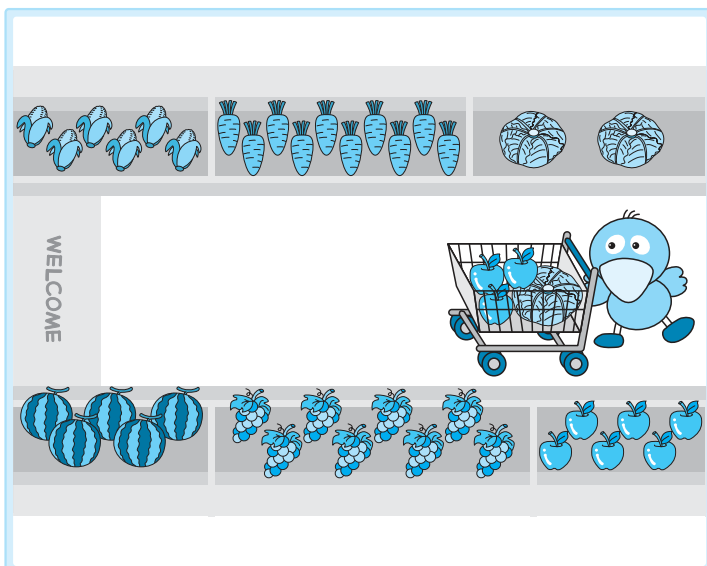
○	3
○	2

○	4
○	2



X11 得分

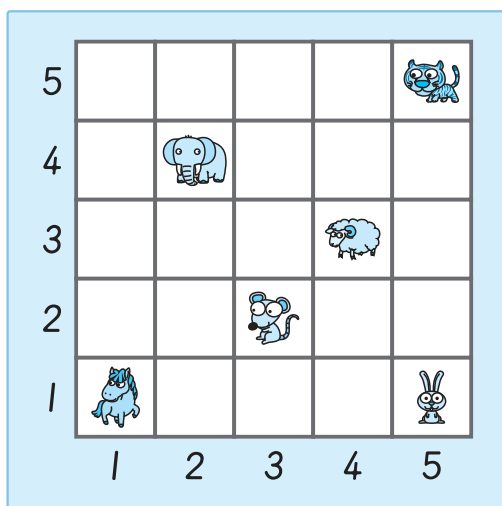
11



	(3)	(5)
	(5)	(4)
	(9)	(2)
	(10)	(1)
	(6)	(3)

X12 得分

12



(2, 2) ↑ ↑ (2, 4) (elephant), (sheep)

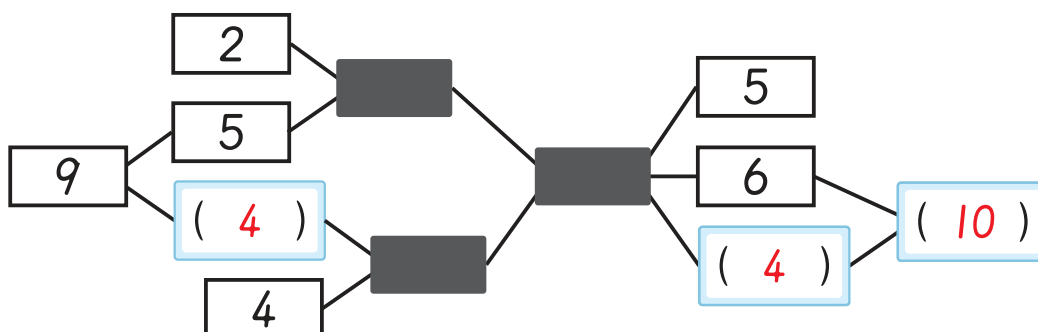
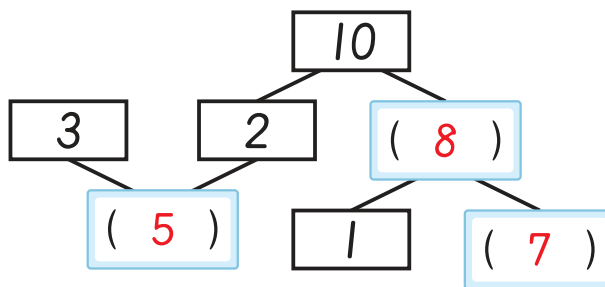
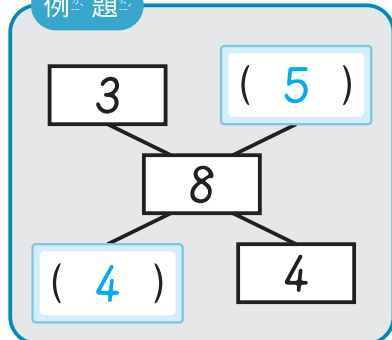
(4, 2) ↓ → (5, 1) (horse), (rabbit)

(5, 3) ← ← ↓ (3, 2) (mouse), (elephant)

X13 得分

13

例題








後面還有題目

X14 得分

14

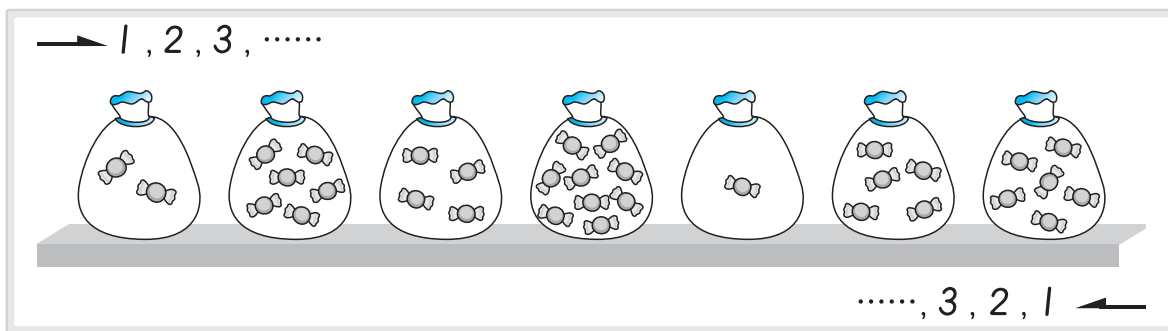


請依左圖回答問題：

- 1 的右邊是 (  ) 。
- 2 的左邊是 ( ,  , ) 。
- 3 往左邊數第 2 個人是 ( ,  , ) 。

X15 得分

15



$$\begin{array}{c} \boxed{2} \\ \hline \boxed{(6)} \end{array} \quad \begin{array}{c} \boxed{(2)} \\ \hline \boxed{5} \end{array} \quad \begin{array}{c} \boxed{5} \\ \hline \boxed{(1)} \end{array} \quad \begin{array}{c} \boxed{4} \\ \hline \boxed{(9)} \end{array}$$

$$\begin{array}{c} \boxed{3} \\ \hline \boxed{(4)} \end{array} + \begin{array}{c} \boxed{2} \\ \hline \boxed{(5)} \end{array} = \boxed{(9)} \quad \begin{array}{c} \boxed{6} \\ \hline \boxed{(6)} \end{array} - \begin{array}{c} \boxed{6} \\ \hline \boxed{(5)} \end{array} = \boxed{(1)}$$

$$\begin{array}{c} \boxed{(4)} \\ \hline \boxed{(9)} \end{array} + \begin{array}{c} \boxed{(3)} \\ \hline \boxed{(1)} \end{array} = 10$$



X16 得分

16

$$6 + \blacksquare = 9$$

$$\blacksquare = (3)$$

$$\blacktriangle + 3 = 5$$

$$\blacktriangle = (2)$$


$$10 - \bullet = 4$$

$$\bullet = (6)$$

$$\blacksquare - \blacktriangle + \bullet = (7)$$

X17 得分

17



看圖回答問題：

- ① 鳥巢在 (上, 下) 面。
- ② 椅子的 (上, 下) 面有一隻小狗。
- ③ 小美的 (上, 下, 前, 後) 面有溜滑梯，而且 (上, 下, 前, 後) 面有花圃。
- ④ 小美的 (左, 右) 手牽著媽媽。



數字規律 - I

例題

9, 8, 7, 9, 8, 7, 9, 8, 7, 9, □, □, □ ……

(✓) 8, 7, 9 () 7, 8, 9 () 8, 9, 7 () 9, 7, 8

Y1 得分

2, 5, 6, 2, 5, 6, 2, 5, 6, 2, 5, □, □, □ ……

() 2, 5, 6 (✓) 6, 2, 5 () 2, 6, 5 () 6, 5, 2

1, 6, 0, 3, 1, 6, 0, 3, 1, 6, 0, 3, 1, □, □, □ ……

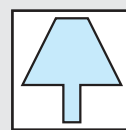
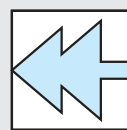
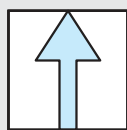

(✓) 6, 0, 3 () 1, 0, 6 () 0, 6, 3 () 3, 6, 1

7, 2, 1, 0, 2, 7, 2, 1, 0, 2, 7, □, □, □ ……





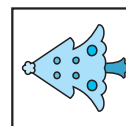

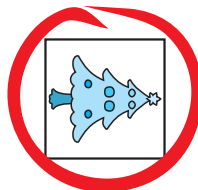
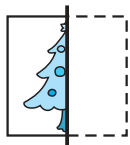
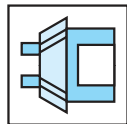
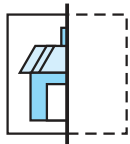





(✓) 2, 1, 0 () 0, 1, 2 () 2, 0, 1 () 1, 0, 2

圖形對稱

例題




Y2 得分



立體視圖

Y3 得分



數字規律 - II 請觀察數字規律，找出愛心的數字。

Y4 得分

1 → 4 → 7 → 1 → 4 → 7 → 1 → 4 → 愛心 → 1
(7)

1 → 2 → 4 → 5 → 7 → 8 → 10 → 11 → 愛心
(13)

2 → 1 → 4 → 3 → 6 → 5 → 8 → 7 → 愛心 → 9 → 12
(10)

10 → 1 → 2 → 9 → 3 → 4 → 愛心 → 5 → 6 → 7 → 7
(8)

後面還有題目



圖形組合

例題



(✓)



()



(✓)



()

Y5 得分



(✓)



()



(✓)



()



()



(✓)



(✓)



()



(✓)



()



()



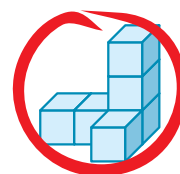
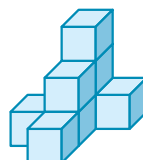
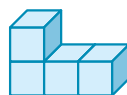
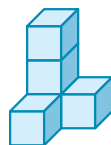
(✓)

立體計數 請圈出與其他數量不同的立體图形：

例題




Y6 得分



(老師專用)

Z1 得分

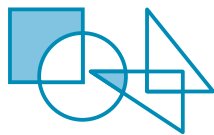
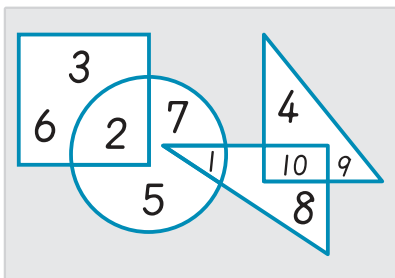
1



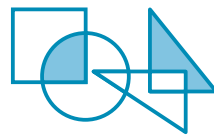
左圖中，
可以找得到 (6) 個三角形。

Z2 得分

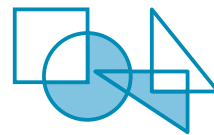
2



(10)



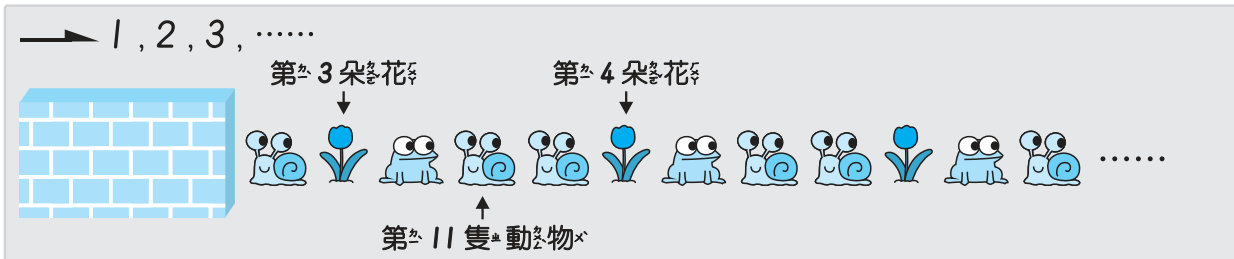
(15)



(21)

Z3 得分

3

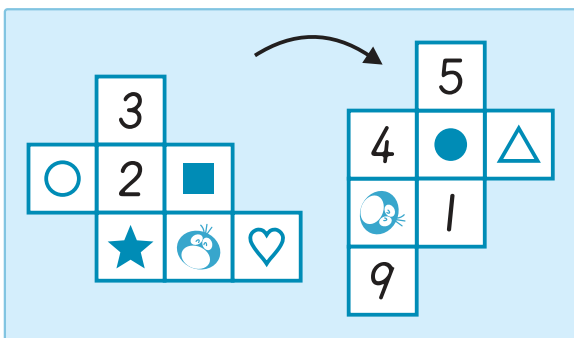


上圖依一定規律排列，請問：

遮住了 (2) 朵花、(3) 隻和 (5) 隻。

Z4 得分

4



○ = (5) ★ = (4)

♡ = (9)


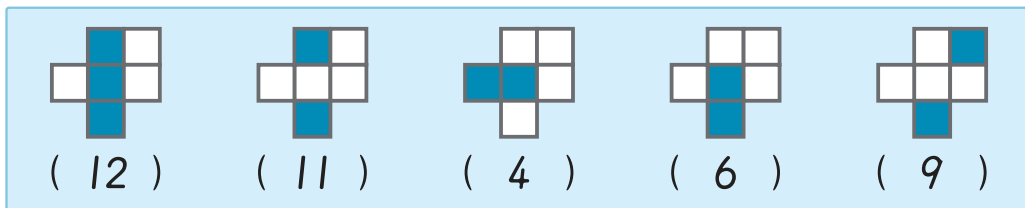
● + ♡ = (11)

♡ - ■ = (8)


★ + ○ - ● = (7)

Z5 得分

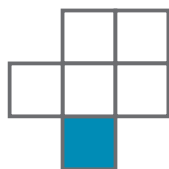
5




(1)




(3)



(5)



(10)



(8)