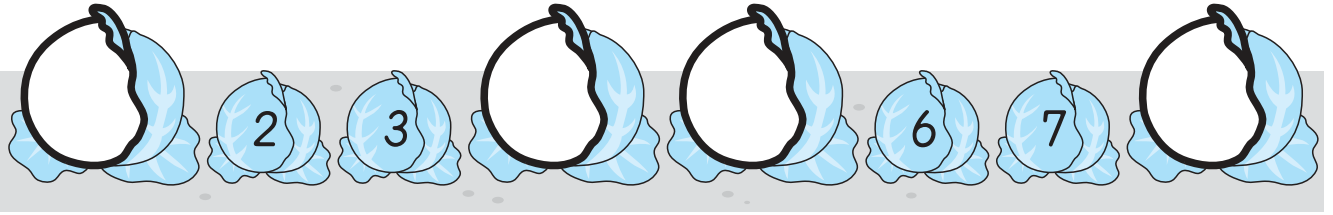


(老師專用)

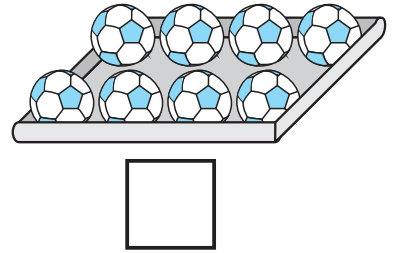
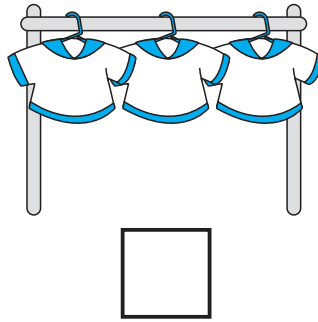

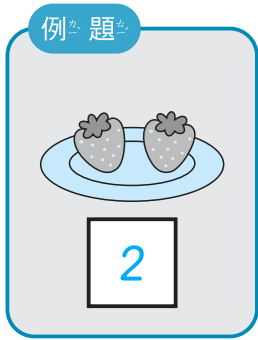
X1 得分

1



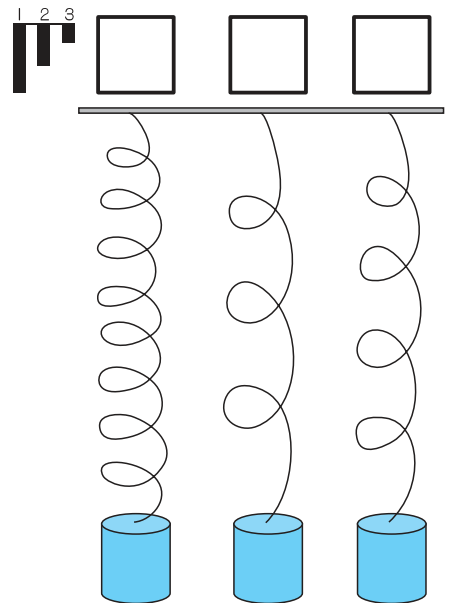
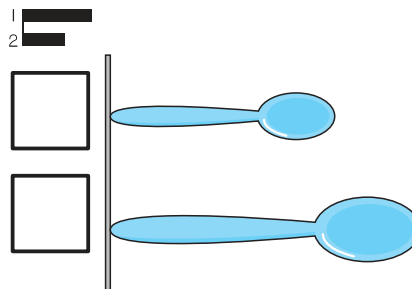

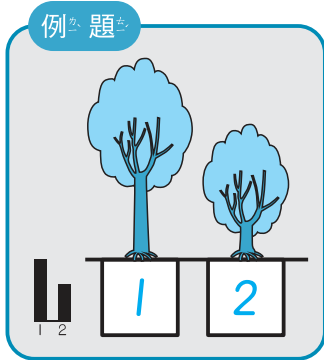
X2 得分

2



X3 得分


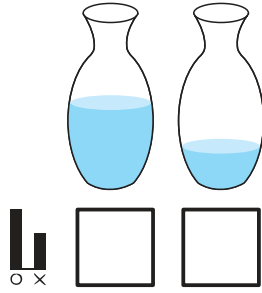
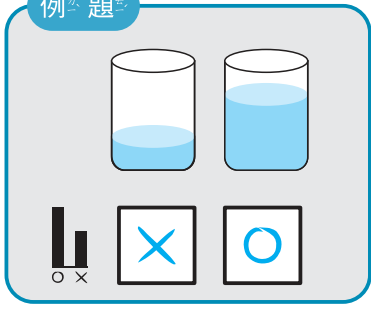
3



X4 得分

4

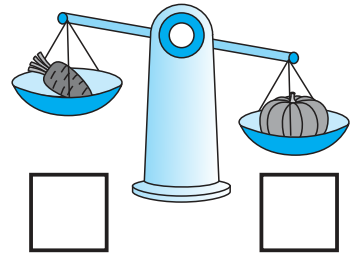
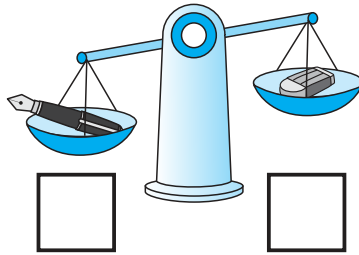
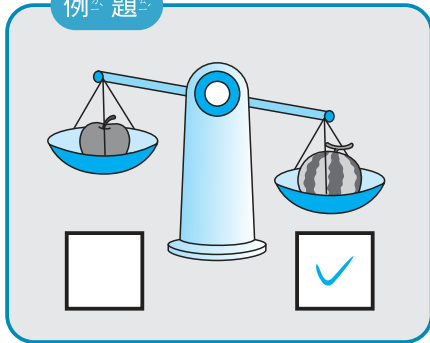
例題



X5 得分

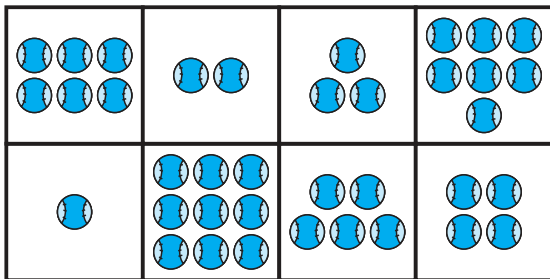
5

例題

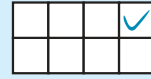


X6 得分

6



(6)



()



()



()

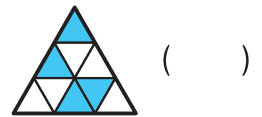
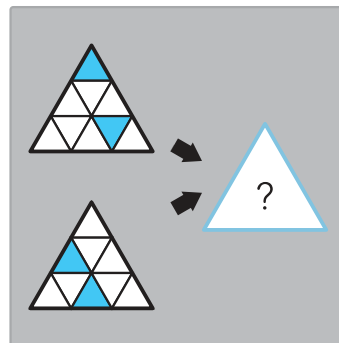
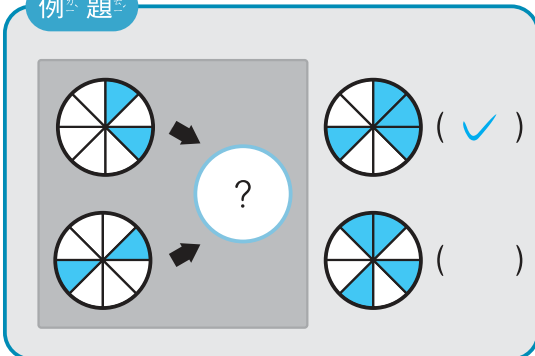


()

X7 得分

7

例題



()



()

後面還有題目

第十七屆

2 大

X8 得分

8

例題

2 ~ 5

?	5
4	2

(3)

3 ~ 8

7	?
8	3
5	6

()

2 ~ 10


8	2	3
4	?	5
10	6	9

()

X9 得分

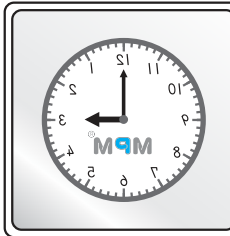
9

例題



2:00 10:00

() (✓)



3:00 12:00

() ()



12:00 7:00

() ()

8:00


()

X10 得分

10

例題


2	<	3
---	---	---



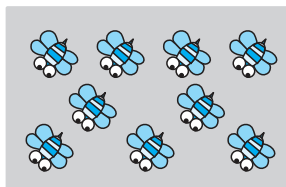
()

<

>



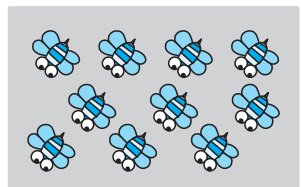
()



()

<

>




()



X11 得分


11



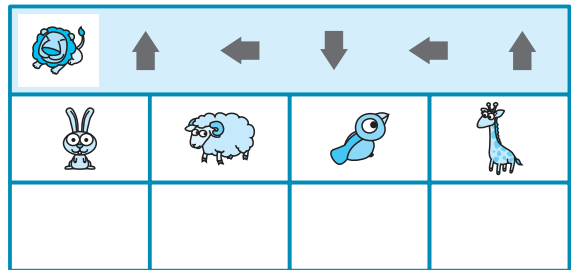
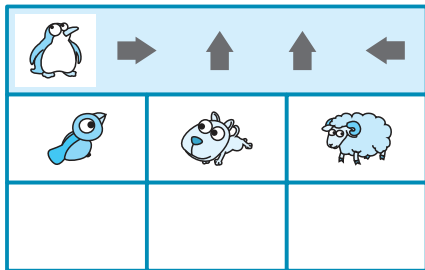
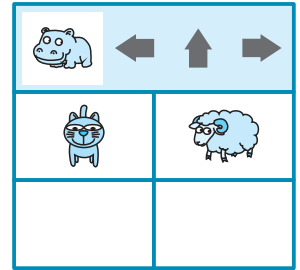
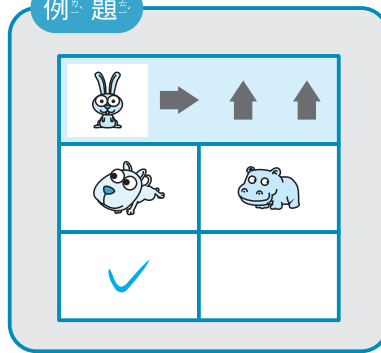
4				

X12 得分

12

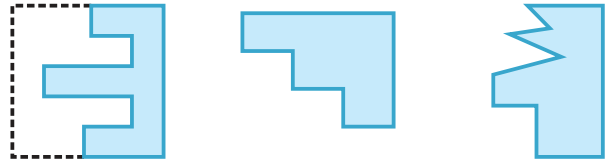
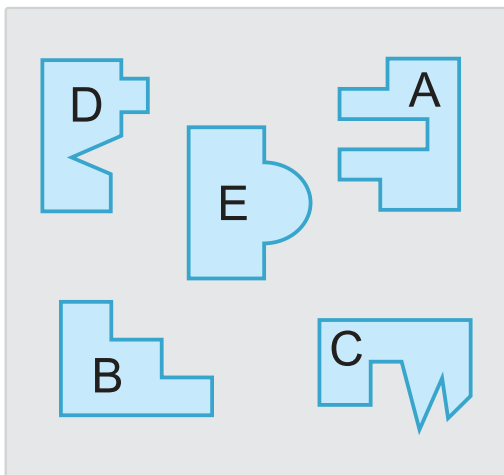


例題



X13 得分

13



(A) () ()



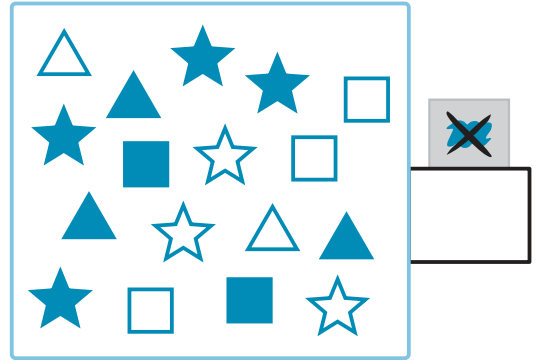
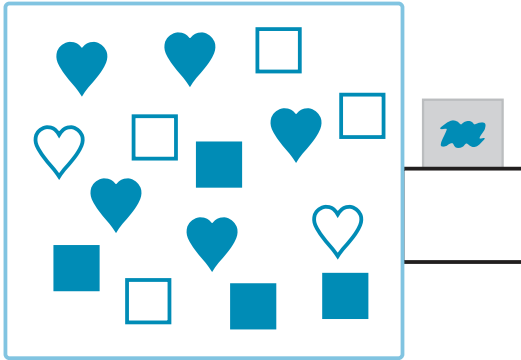
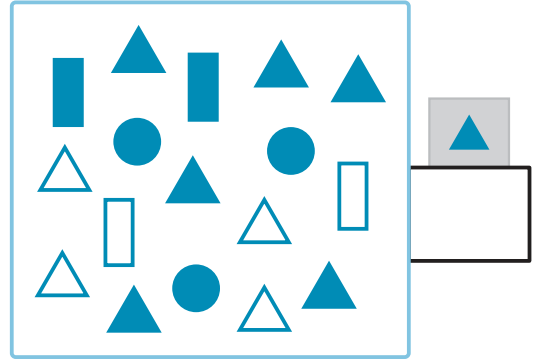
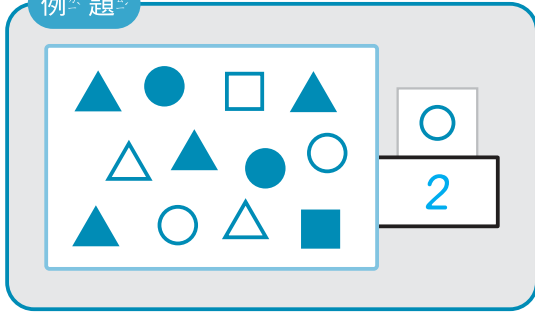
() ()

後面還有題目

X14 得分

14

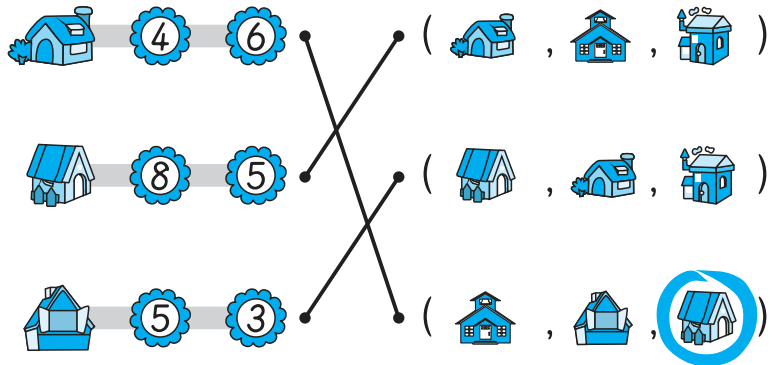
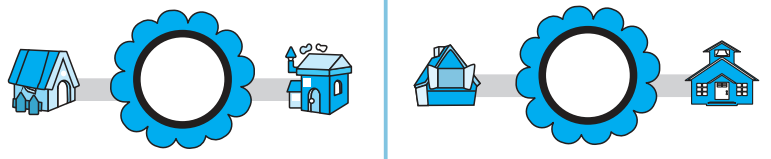
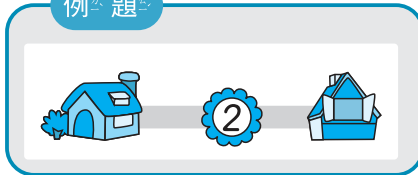
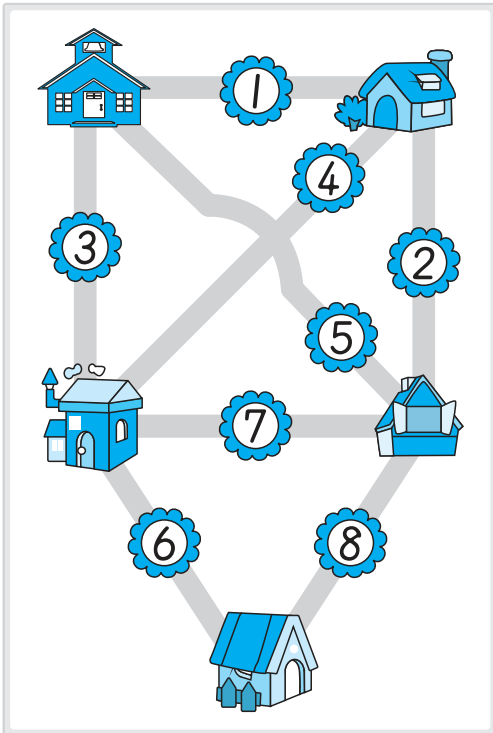
例題



X15 得分

15

例題



X16 得分

16

例題

→ 1, 2, 3, ……



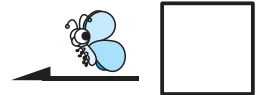
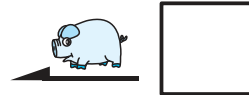

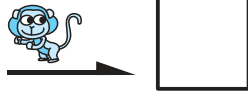
……, 3, 2, 1 ←



→ 1, 2, 3, ……

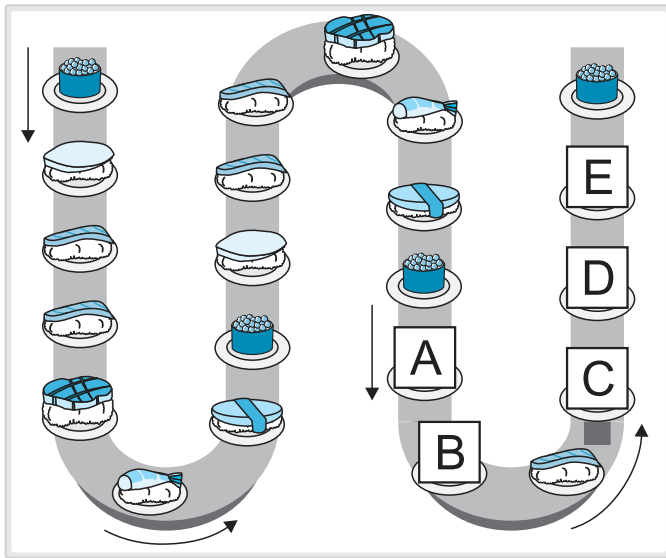


……, 3, 2, 1 ←



X17 得分

17



A (5)



B ()



C ()



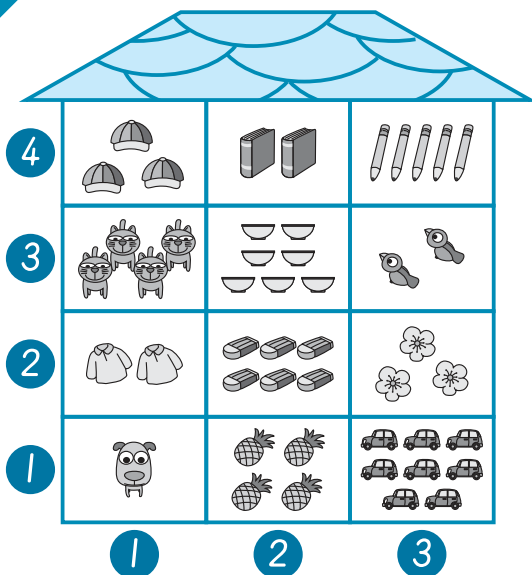
D ()



E ()

X18 得分

18



(2, 1) — ()

(1, 3) — ()

(,) — (4)

(3, 2) — ()

(,) — ()

(2, 3) — ()

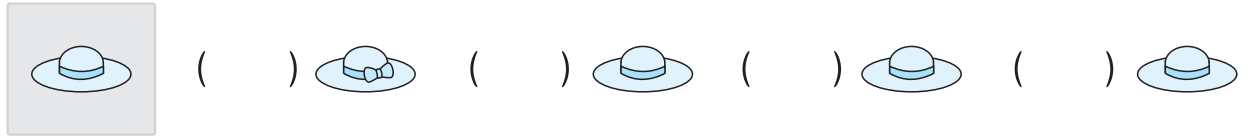


後面還有題目

異同比較

例題



Y1 得分



數字順序

例題

4571

5471

7154

4571

7541

()

()

(✓)

()

Y2 得分

526

526

562

652

256

()

()

()

()

8902

8920

8902

8092

9082

()

()

()

()

數字規律

Y3 得分

例題

3, 2, 9, 3, 2, 9, 3, 2, 9, 3, 2, 9, ……

1, 7, 4, 1, 7, 4, 1, 7, 4, 1, , 4, ……

6, 0, 1, 5, 6, 0, 1, 5, 6, 0, 1, 5, , , ……

8, 4, 3, 6, 8, 4, 3, 6, , 4, 3, , 8, 4, ……



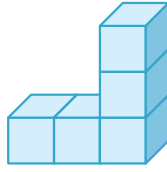
立體計數

Y4 得分

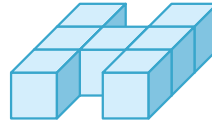
例題



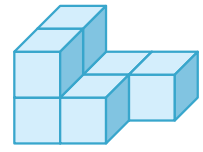
(4) 個



() 個



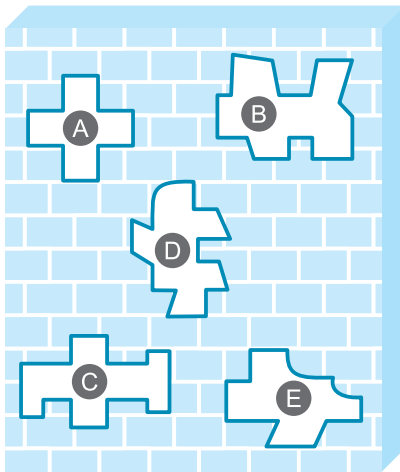
() 個


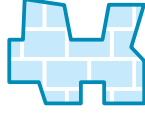




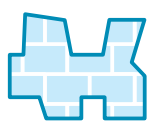


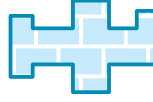
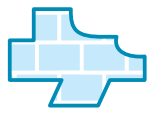
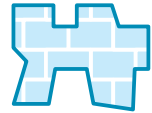



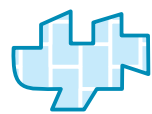

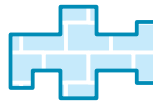




() 個

圖形嵌合

Y5 得分



- A ( ,  ,  , )
- B ( ,  ,  , )
- C ( ,  ,  , )
- D ( ,  ,  , )
- E ( ,  ,  , )

立體空間關係 將塗色的面印在紙上，會是什麼形狀？

例題



()



()



()



()

Y6 得分



()



()



()



()



()



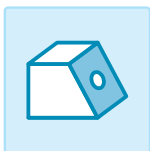
()



()



()



()



()



()



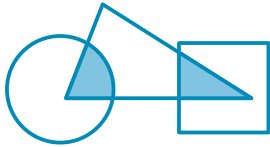
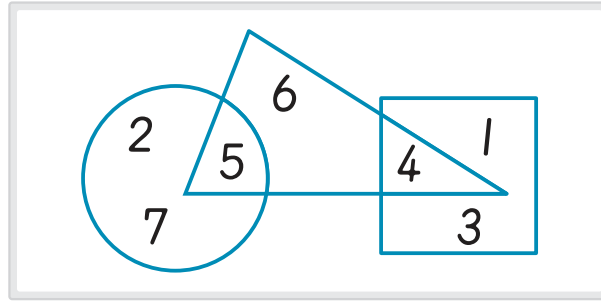
()

後面還有題目

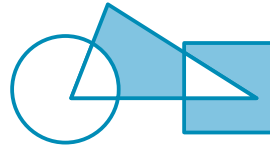
(老師專用)

Z1 得分

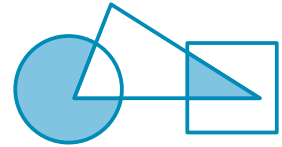
1



(9)



()



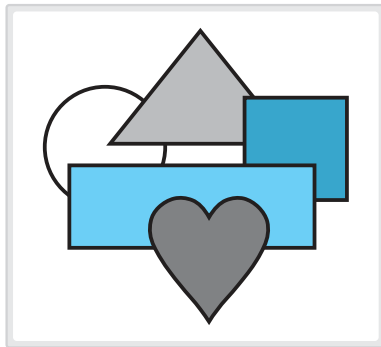
()

Z2 得分

2

例題

	△	■
1 2 3	3	1
✓, X	X	✓



	○	▬	△	♥	■
1 2 3 4 5	4	2	5	1	3
✓, X					

Z3 得分

3

→ 1, 2, 3, ...

1

	↑	↑	⬆
→	2		

2 圈 圈 看 :

9	⬆	⬆	↑	⬆
?	⬆	⬆	↑	⬆

11	⬆	⬆	↑	⬆
?	⬆	⬆	↑	⬆



Z4 得分

4

例題

1	2
3	4

■	□	■	□
□	■	□	■

■	□
□	■

(5)

3	4
2	5
6	1

■	■	□	■
□	■	■	□
■	□	■	■

□	■
□	□
■	□

()

1	3	4
5	2	6

□	■	■	□
■	□	□	■

()

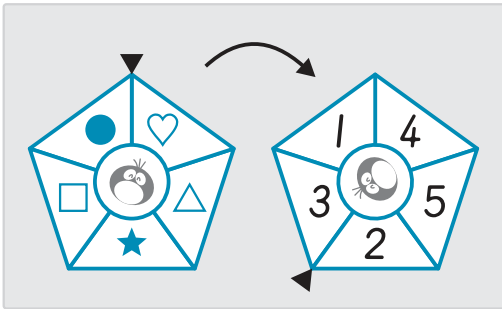
2	3	8
7	4	5

□	□	■	□	□	■	□
□	■	■	■	■	□	■

()

Z5 得分

5



例題

9	
♥	(6)

8	
()	△

()	
●	□

()	★
10	