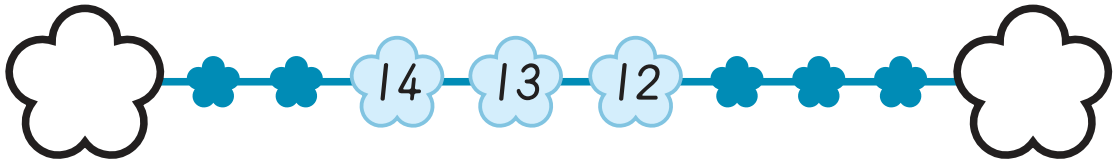
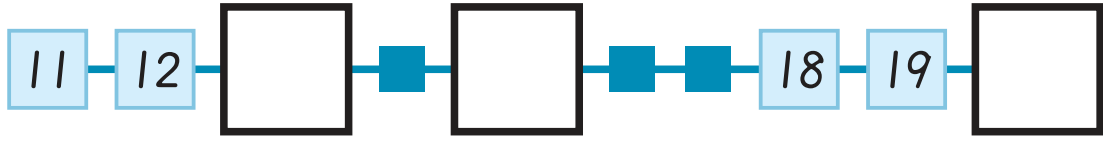
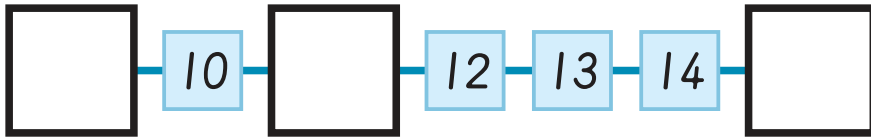


(老師專用)

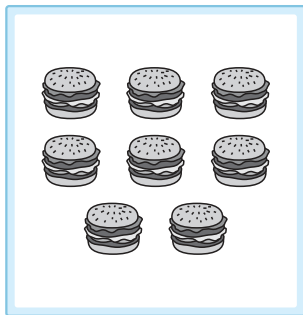
X1 得分

1

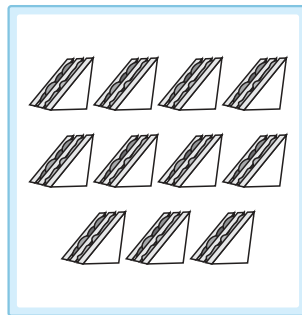


X2 得分

2



8



[ ]



[ ]

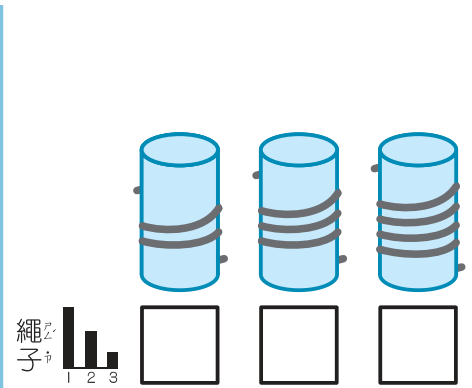
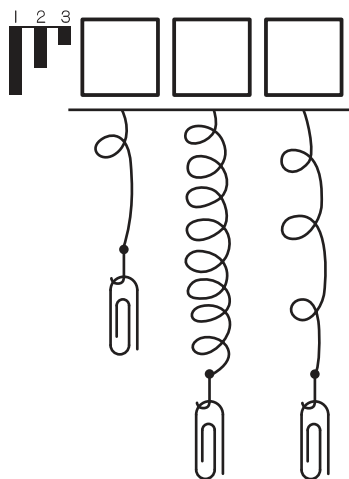
X3 得分

3

例題

An example problem box. On the left, a bar chart has three bars of heights 1, 3, and 2. To the right is a table with three rows, each containing a number in a box and a corresponding pencil illustration.

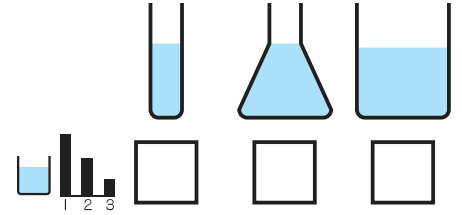
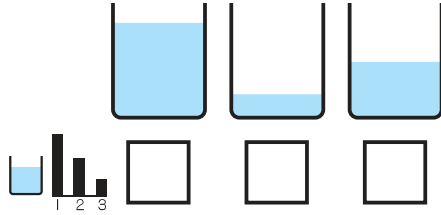
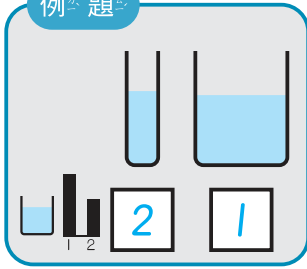
1	
3	
2	



X4 得分

4




例題



X5 得分


5

例題



X6 得分

6



1					
	1	7			

2 比 (多, 少) ( 6 )

3 比 (多, 少) ( )

4 比 (多, 少) ( )

後面還有題目

X7 得分

7

$4 + 5 = ( \quad )$

$6 + ( \quad ) = 11$

$( \quad ) + 4 = 13$

$18 - 3 = ( \quad )$

$15 - ( \quad ) = 7$

$( \quad ) - 8 = 12$

X8 得分

8

★ = 10    ☆ = 1

例題

X9 得分

9

例題

X10 得分

10

連カ連カ看マ、：

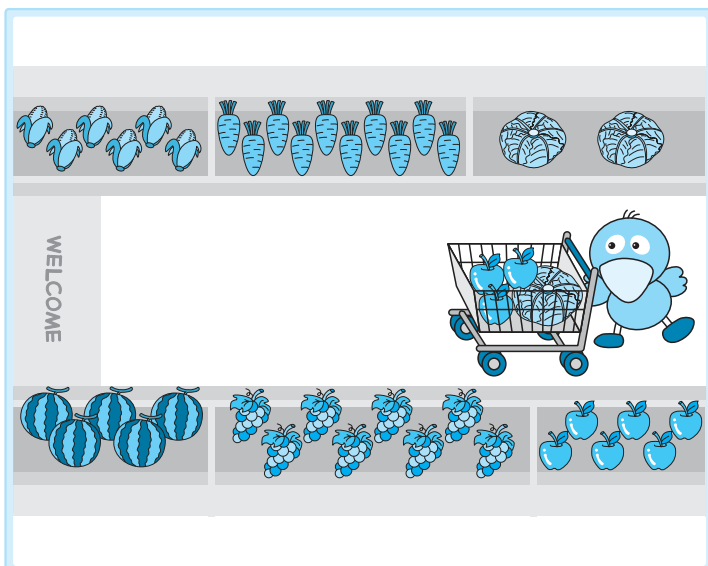
○	2
○	3

○	3
○	2

○	4
○	2

X11 得分

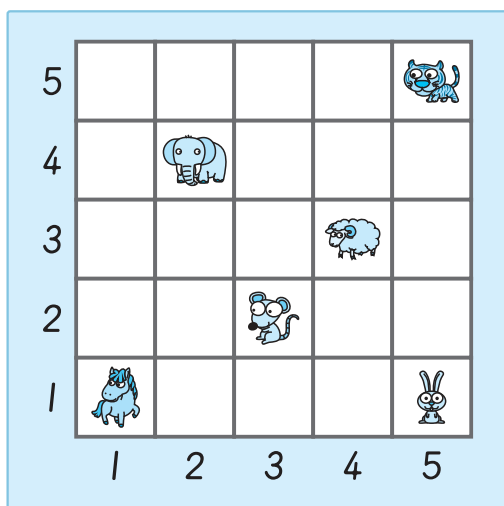
11



	( 3 )	( )
	( )	( )
	( )	( )
	( )	( )
	( )	( )

X12 得分

12



(2, 2) (2, 4)

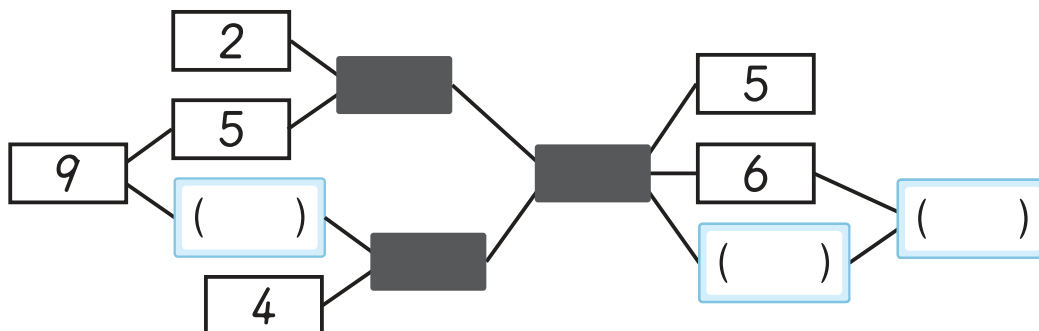
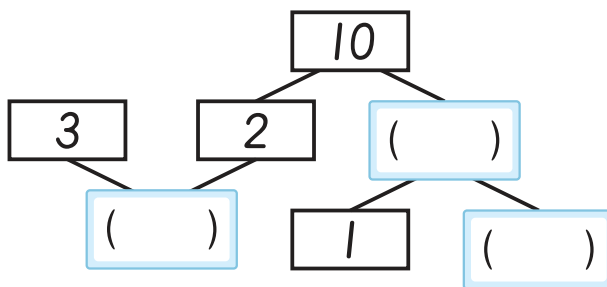
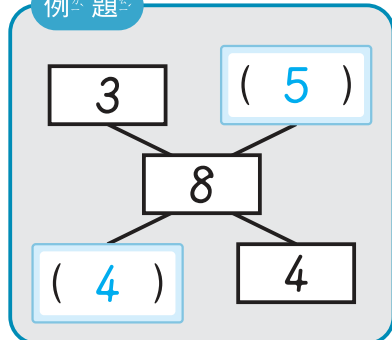
(4, 2) ( , )

(5, 3) ( , )

X13 得分

13

例題











後面還有題目

X14 得分

14

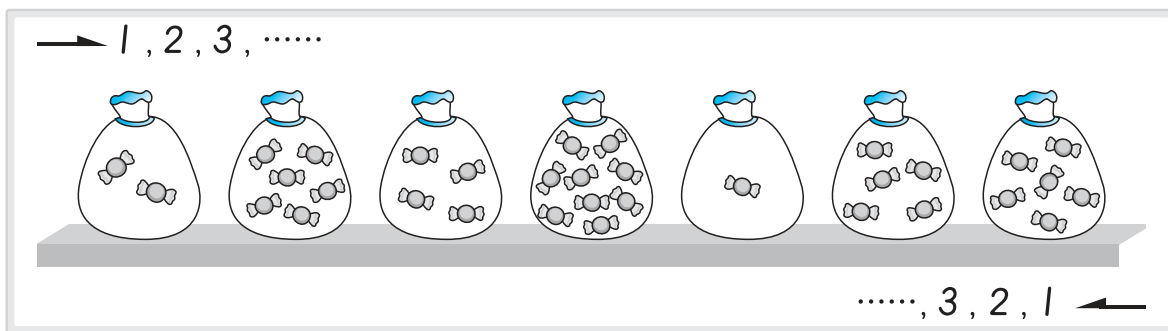


請依左圖回答問題：

- 1 的右邊是 (    )。
- 2 的左邊是 (  ,  ,  )。
- 3 往左邊數第 2 個人是 (  ,  ,  )。

X15 得分

15



$\begin{array}{c} \boxed{2} \\ \rightarrow \\ \boxed{6} \end{array}$	$\begin{array}{c} \boxed{(2)} \\ \leftarrow \\ \boxed{5} \end{array}$	$\begin{array}{c} \boxed{5} \\ \rightarrow \\ \boxed{(\quad)} \end{array}$	$\begin{array}{c} \boxed{4} \\ \leftarrow \\ \boxed{(\quad)} \end{array}$
--	---	--	---

$\begin{array}{c} \boxed{3} \\ \rightarrow \\ \boxed{(\quad)} \end{array} + \begin{array}{c} \boxed{2} \\ \leftarrow \\ \boxed{(\quad)} \end{array} = \boxed{(\quad)}$	$\begin{array}{c} \boxed{6} \\ \leftarrow \\ \boxed{(\quad)} \end{array} - \begin{array}{c} \boxed{6} \\ \rightarrow \\ \boxed{(\quad)} \end{array} = \boxed{(\quad)}$
--	--

$\begin{array}{c} \boxed{(\quad)} \\ \rightarrow \\ \boxed{9} \end{array} + \begin{array}{c} \boxed{(\quad)} \\ \leftarrow \\ \boxed{(\quad)} \end{array} = 10$
---



X16 得分

16

$$6 + \blacksquare = 9$$

$$\blacksquare = ( \quad )$$

$$\blacktriangle + 3 = 5$$

$$\blacktriangle = ( \quad )$$


$$10 - \bullet = 4$$

$$\bullet = ( \quad )$$

$$\blacksquare - \blacktriangle + \bullet = ( \quad )$$

X17 得分

17



看圖回答問題：

- ① 鳥巢在(上, 下)面。
- ② 椅子的(上, 下)面有一隻小狗。
- ③ 小美的(上, 下, 前, 後)面有溜滑梯，  
而且(上, 下, 前, 後)面有花圃。
- ④ 小美的(左, 右)手牽著媽媽。



數字規律 - I

例題

9, 8, 7, 9, 8, 7, 9, 8, 7, 9, □, □, □ ……

() 8, 7, 9    () 7, 8, 9    () 8, 9, 7    () 9, 7, 8

Y1 得分

2, 5, 6, 2, 5, 6, 2, 5, 6, 2, 5, □, □, □ ……

() 2, 5, 6    () 6, 2, 5    () 2, 6, 5    () 6, 5, 2

1, 6, 0, 3, 1, 6, 0, 3, 1, 6, 0, 3, 1, □, □, □ ……

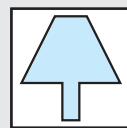
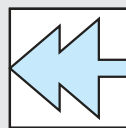
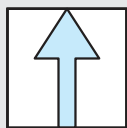

() 6, 0, 3    () 1, 0, 6    () 0, 6, 3    () 3, 6, 1

7, 2, 1, 0, 2, 7, 2, 1, 0, 2, 7, □, □, □ ……






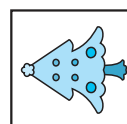



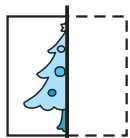
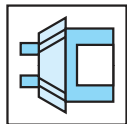
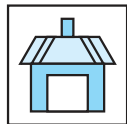
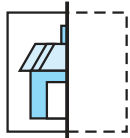





() 2, 1, 0    () 0, 1, 2    () 2, 0, 1    () 1, 0, 2

圖形對稱

例題




Y2 得分



立體視圖

Y3 得分



數字規律 - II 請觀察數字規律，找出愛心的數字。

Y4 得分

1 → 4 → 7 → 1 → 4 → 7 → 1 → 4 → 愛心 → 1  
( )

1 → 2 → 4 → 5 → 7 → 8 → 10 → 11 → 愛心  
( )

2 → 1 → 4 → 3 → 6 → 5 → 8 → 7 → 愛心 → 9 → 12  
( )

10 → 1 → 2 → 9 → 3 → 4 → 愛心 → 5 → 6 → 7 → 7  
( )

後面還有題目





圖形組合

例題



(✓)



( )



(✓)



( )

Y5 得分



( )



( )



( )



( )



( )



( )



( )



( )



( )



( )



( )



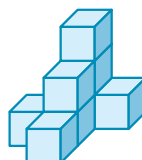
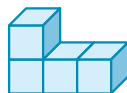
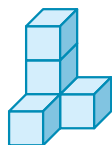
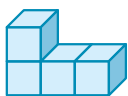
( )

立體計數 請圈出與其他數量不同的立體形體：

例題




Y6 得分



(老師專用)

Z1 得分

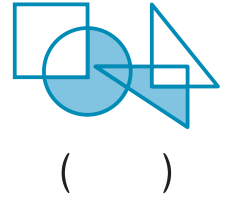
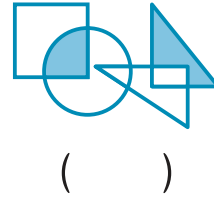
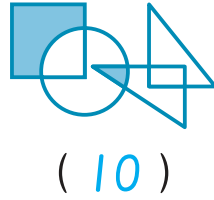
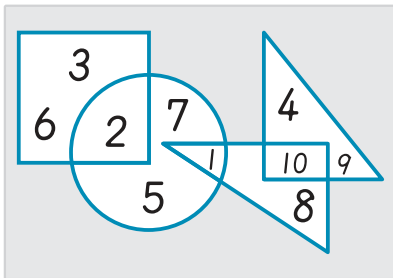
1



左圖中，  
可以找得到 ( ) 個三角形。

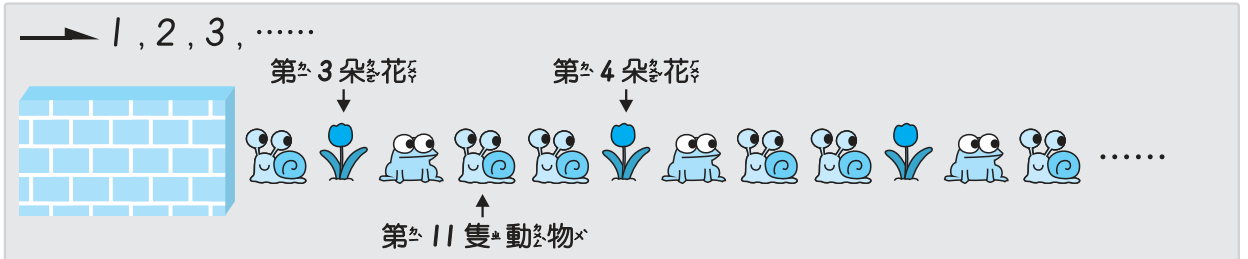
Z2 得分

2



Z3 得分

3

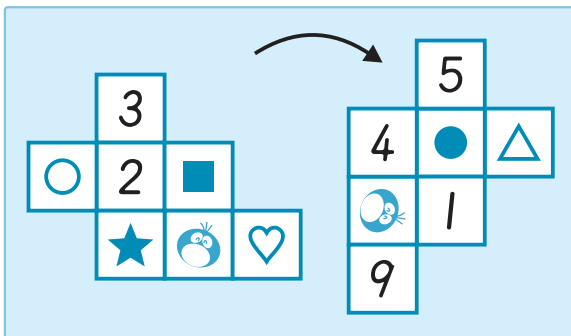


上圖依一定規律排列，請問：

遮住了 ( ) 朵花、( ) 隻和 ( ) 隻。

Z4 得分

4



- = ( 5 )      ★ = ( )
- ♥ = ( )
- + ♥ = ( )
- ♥ - ■ = ( )
- ★ + ○ - ● = ( )

Z5 得分

5

